

Name - _____

Q1. Write in words

a. 2467 - _____

b. 1235 - _____

c. 9834 - _____

d. 2345 - _____

e. 4590 - _____

f. 3478 - _____

g. 347 - _____

h. 784 - _____

i. 934 - _____

j. 841 - _____

Q2. Write predecessor of the given numbers

a. 234 - _____

b. 765 - _____

c. 157 - _____

d. 3458 - _____

e. 4190 - _____

f. 24 - _____

g. 78 - _____

h. 831 - _____

i. 563 - _____

j. 45 - _____

Q3. Write successor of the given numbers

a. 229 - _____

b. 456 - _____

c. 234 - _____

d. 812 - _____

e. 459 - _____

f. 125 - _____

g. 678 - _____

h. $900 - \underline{\hspace{2cm}}$

i. $455 - \underline{\hspace{2cm}}$

j. $560 - \underline{\hspace{2cm}}$

Q4. Arrange and add

a. 2456 and 1345

b. 4567 and 2478.

C. 2378 and 7890

Q5. Arrange and subtract

a. 8904 and 1456

b. 6745 and 3467

c. 4567 and 2443

Q6. Arrange and multiply

a. 309×3

b. 132×5

c. 499×8







Q7 Arrange and divide

a. 15 divided by 3

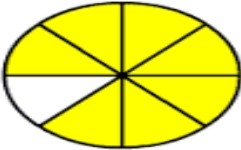
b 21 divided by 7


c. 39 divided by 4


Q8. Write the time shown


		
2 o'clock	___ o'clock	___ o'clock
		
___ o'clock	___ o'clock	___ o'clock

Q9. Circle the correct fraction from the given choices.

1.  $\frac{7}{8}$ $\frac{5}{7}$ $\frac{6}{8}$

2.  $\frac{1}{2}$ $\frac{4}{6}$ $\frac{2}{3}$

3.  $\frac{3}{4}$ $\frac{2}{3}$ $\frac{3}{6}$

4.  $\frac{2}{3}$ $\frac{6}{8}$ $\frac{1}{2}$

Q10. Convert the kilograms in grams.

- 2kg= _____
- 7kg= _____
- 9kg= _____
- 10kg= _____
- 4kg= _____

f. $12\text{kg} =$ _____

g. $13\text{kg} =$ _____

Q11. Convert metres into centimetres

a. $5\text{m} =$ _____

b. $6\text{m} =$ _____

c. $9\text{m} =$ _____

d. $17\text{m} =$ _____

e. $11\text{m} =$ _____

f. $18\text{m} =$ _____

g. $9\text{m} =$ _____

Q12. Fill in the blanks.

1. $30 \text{ Rupees} + 20 \text{ Rupees} =$ _____ Rupees

2. $15 \text{ Rupees} + 25 \text{ Rupees} =$ _____ Rupees

3. $1 \text{ Rupee} + 9 \text{ Rupees} =$ _____ Rupees

4. $5 \text{ Rupees} + 15 \text{ Rupees} =$ _____ Rupees

5. $85 \text{ Rupees} + 30 \text{ Rupees} =$ _____ Rupees

6. $65 \text{ Rupees} = 10 \text{ Rupees} + 25 \text{ Rupees} +$ _____ Rupees

7. $20 \text{ Rupees} + 15 \text{ Rupees} =$ _____ Rupees

8. $55 \text{ Rupees} + 25 \text{ Rupees} + 15 \text{ Rupees} =$ _____ Rupees

