

JASWANT MODERN SR.SEC.SCHOOL CLASS-1 SUB-MATHS SET-A
SUMMER HOLIDAY HOME WORK 2026-2027

NAME _____

Q1. Write the number names:

- i. 88 _____
- ii. 29 _____
- iii. 100 _____
- iv. 120 _____
- v. 19 _____

Q2. Complete the Dodging Table:

- i. $2 \times 4 =$ _____ vi. $3 \times 6 =$ _____
- ii. $5 \times 3 =$ _____ vii. $2 \times 8 =$ _____
- iii. $3 \times 9 =$ _____ viii. $4 \times 4 =$ _____
- iv. $4 \times 7 =$ _____ ix. $4 \times 2 =$ _____
- v. $5 \times 8 =$ _____ x. $3 \times 4 =$ _____

Q3. Put the correct Sign:($<$, $>$, $=$)

12		17
23		27
53		53
89		99
67		76

38	38
10	100
46	36
75	76
61	59

Q4. Arrange the numbers in Ascending order:

- i. 46,39,42,35,22= _____
- ii. 24,33,20,41,28= _____
- iii. 50,36,19,37,23 = _____
- iv. 26,71,73,49,56= _____

Q5. Arrange the numbers in Descending order:

- i. 24,40,15,52= _____
- ii. 98,88,57,76= _____
- iii. 78,34,16,49= _____
- iv. 9,11,74,98= _____

Q5 add and write the product

1. $2+2+2=2 \times 3 =$ _____

2. $4+4=4 \times$ _____ = _____

3. $3+3+3+3+3=3\times \underline{\quad} = \underline{\quad}$

4. $5+5=5\times \underline{\quad} = \underline{\quad}$

5. $3+3+3=3\times \underline{\quad} = \underline{\quad}$

Q6 Circle the largest number

- a. 22,76,98,34,55
- b. 45,70,10,33,80
- c. 66,56,09,42,19
- d. 20,18,52,29,13
- e. 55,16,29,24,62

Q7. Tick the correct number after reading the number names

- a. Thirty five = 32,78,35,23,38
- b. Eleven = 11,55,10,9,55
- c. Seventy nine = 66,65,82 79,30
- d. One hundred and fifty = 110,120,150,140,160
- e. Two hundred = 100,300,200,600,500

Q8. Circle the Smallest number

- a) 22,14,07,28,11
- b) 10,09,08,04,02
- c) 08,03,17,19,01
- d) 20,23,22,21,24

Q1) What comes After-

- a) 22= _____
- b) 79= _____
- c) 65= _____
- d) 99= _____
- e) 43= _____

Q2) Write the numerals for the given number names

- a) Twenty five= _____
- b) One hundred eleven= _____
- c) Eighty eight = _____
- d) Nineteen= _____
- e) Thirty seven= _____

Q3) What comes in Between –

- a) 13 _____ 15
- b) 21 _____ 23
- c) 57 _____ 59
- d) 46 _____ 48
- e) 50 _____ 52

Q4) Fill in the blanks

- a) A square has _____ sides .
- b) There are zero sides in a _____
- c) A _____ has three sides.
- d) A _____ has equal opposite sides.

. Subtract the following:

	1	3
-	0	2

	4	9
-	2	5

	1	4
-	1	0

	1	6
-	1	1

	5	9
-	3	2

	3	5
-	1	3

Q3. Find the product:

	7
X	2

	8
X	1

	2
X	5

1	1
X	2



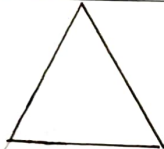

	6
X	3

	4
X	4

	7
X	3

	8
X	2

Q4. Identify the Shape & write their Names & Color them:

Shape	Corners	Sides	Draw it
			
			
			
			

Activity:

- Used the different shapes (Circle, Square, Rectangle, Triangle) and make any item using Cardboard.
- Learn Tables 2 to 5 thoroughly.
- Visit to the Grocery shop & with the help of their parents count the items you buy paste the pictures showing number of items brought in your scrap book.