
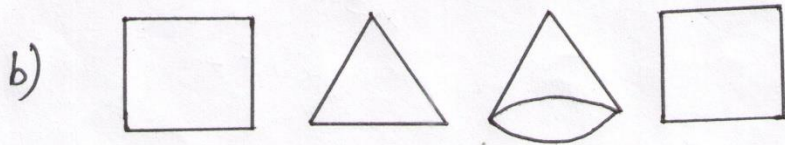
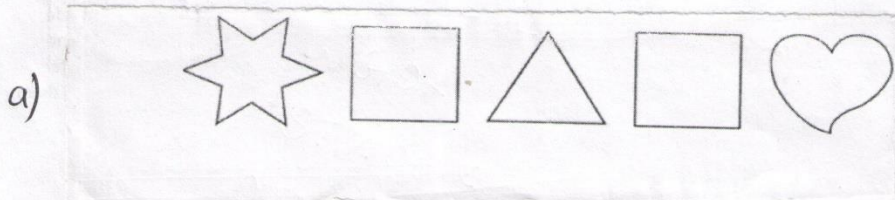


Q1- Circle the objects with blue colour that are round and circle the objects with red colour that are long :-



Q2 – Identify the Square :-



Q3 - Write the numbers in their short forms. One has been done for you

a) 2 tens 8 ones = _____.

e) 3 tens 7 ones = _____

b) 5 tens 4 ones = _____.

f) 5 tens = _____

c) 7 tens 1 ones = _____.

g) 4 tens 6 ones = _____

d) 9 tens 3 ones = _____.

h) 6 tens 2 ones = _____

Q4- Expand the numbers .

a) 42 = _____.

e) 15 = _____

b) 64 = _____.

f) 721 = _____

c) 26 = _____

g) 215 = _____

d) 98 = _____

h) 53 = _____

Q5 Add the numbers and find out the answers :-

a) $55 + 7 =$ _____.

e) $84 + 9 =$ _____

b) $25 + 8 =$ _____.

f) $76 + 3 =$ _____


c) $75 + 3 =$ _____.

g) $95 + 6 =$ _____

d) $32 + 4 =$ _____.

h) $18 + 2 =$ _____

Q6. - Match the following shapes :-




Triangle



Square



Circle



Rectangle.



Cone.

Q7 - Write the number names

- | | |
|--------|-------|
| a) 5 | f) 24 |
| b) 16. | g) 57 |
| c) 34. | h) 12 |
| d) 47. | i) 99 |
| e) 91. | J) 61 |

Q8 - Write the numbers for each word

- | | |
|------------------|---------------|
| a) Nine. | f) Fourteen |
| b) Fifty. | g) Ninety two |
| c) Seventy seven | h) Fifty one |
| d) Eighteen | i) Ten |
| e) Twenty Four | j) Sixty six |

Q9 Compare the number and put $<$, $>$ or $=$ sign.

- | | |
|------------------|----------------|
| a) 44 _____ 42. | e) 65 _____ 72 |
| b) 10 _____ 10. | f) 9 _____ 15 |
| c) 21. _____ 25. | g) 89 _____ 95 |
| d) 58. _____ 48 | h) 53 _____ 63 |

Q10 - Write the missing numbers

- a) _____, 4, 5 _____ 7, 8 _____, 10
- b) 29, _____ 31, _____ 33, _____ 35
- c) 75, _____, 77, _____, _____ 80, _____
- d) 53, _____, 55, _____, 57, _____, _____, 60
- e) 19, 20, _____, _____, 23, _____ 25, 26 _____, 28
- f) 31, _____, 33, _____, 34 _____, _____, 37, _____
- g) _____, 61, _____, 63, _____, 65, _____, _____, 68
- h) 91, _____, _____ 94, _____, 96, _____, 98, _____, 100
- i) 101, _____, 103, _____, 105, _____, _____
- j) 11, _____, 13, _____, _____, 16, 17, _____

Q11 - Write the number that comes before, between and after.

- | | | |
|-----------------|----------------|------------------|
| a. _____ 4, 5 | d. 7 _____ 9 | g. 19, 20, _____ |
| b. _____ 13, 14 | e. 16 _____ 18 | h. 31, 32, _____ |
| c. _____ 47, 48 | f. 42 _____ 44 | i. 8, 9, _____ |

Q 12 - Subtract the following:-

$$\begin{array}{r} 126 \\ - 31 \\ \hline \end{array}$$

$$\begin{array}{r} 357 \\ - 46 \\ \hline \end{array}$$

$$\begin{array}{r} 248 \\ - 69 \\ \hline \end{array}$$

$$\begin{array}{r} 446 \\ - 48 \\ \hline \end{array}$$

$$\begin{array}{r} 242 \\ - 45 \\ \hline \end{array}$$

$$\begin{array}{r} 548 \\ - 73 \\ \hline \end{array}$$

$$\begin{array}{r} 671 \\ - 86 \\ \hline \end{array}$$

$$\begin{array}{r} 304 \\ - 47 \\ \hline \end{array}$$

$$\begin{array}{r} 650 \\ - 301 \\ \hline \end{array}$$

$$\begin{array}{r} 355 \\ - 175 \\ \hline \end{array}$$

$$\begin{array}{r} 404 \\ - 138 \\ \hline \end{array}$$

$$\begin{array}{r} 372 \\ - 107 \\ \hline \end{array}$$

$$\begin{array}{r} 544 \\ - 239 \\ \hline \end{array}$$

$$\begin{array}{r} 743 \\ - 554 \\ \hline \end{array}$$

$$\begin{array}{r} 416 \\ - 118 \\ \hline \end{array}$$

$$\begin{array}{r} 646 \\ - 350 \\ \hline \end{array}$$

Q 13 - Write the place value and face value of each underlined digit:

Number.	Face Value.	Place value
---------	-------------	-------------

3807

4915

6003

1273

6835

2084

4819

6411

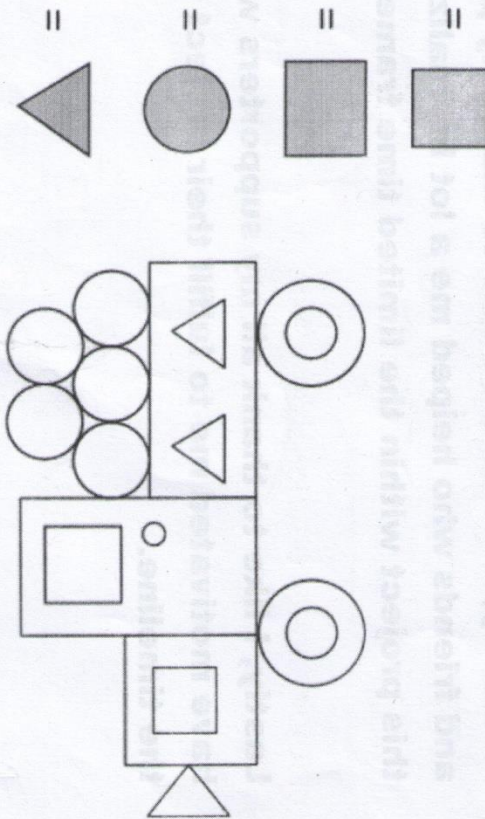
3184

7001

2982

Q14

Color the shapes as shown beside and give their count.



Q15 - Write table of 2 to 8 in notebook and learn it.